


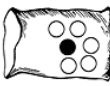




December Fourth Grade Math-Science Calendar

<p>. Which statement below is not true about birds?</p> <p>a. Birds have a constant body temperature. b. Birds can lay spotted eggs. c. Most sea birds have gill to breathe underwater when they catch fish.</p>	<p>Spike loves dog bones. His owner has 5 boxes of bones. If there are 33 bones in each box, how bones does Spike have?</p> 	<p>. Which is an example of humans damaging an ecosystem?</p> <p>a. planting trees b. cutting trees to let new trees grow c. building factories and running cars that release toxic gases in the air.</p>	<p>Fred's dog, Huck, eats 3 cans of dog food a day. How many cans of food will Huck need for 2 months?(There are 30 dyas in a month)</p> 	<p>. Which of these is a characteristic of reptiles?</p> <p>A feathers B fur C scales D segments</p>
<p>Naomi was given 162 fish. If Naomi buys 9 fishbowls, how many fish will she put in each bowl?</p> 	<p>5 What happens to smaller plants when some tall trees are cut down?</p> <p>A. small trees and plants receive more sunlight B. all the small trees will die C. all the small trees fall over D. small trees receive less rainfall</p>	<p>Which item below would not be categorical data?</p> <p>Favorite Season Height of a plant Brand of shoe</p>	<p>Erin's experiment on the molecules involves measuring the time it takes water to move from one state of matter to another. Which measuring device should she use?</p> <p>a. balance scale b. clock or watch c. ruler</p>	<p>Which item below would not be numerical data?</p> <p>Rain fall in a month Size of shoes Favorite cookie</p>
<p>Martin throws a ball into the air. The ball then falls to the ground. What force pulls the ball downward?</p> <p>a. magnetism b. gravity c. friction</p>	<p>What is the likelihood of selecting a black marble?</p>  <p>Likely unlikely Certain impossible</p>	<p>. Which statement is true about vertebrates?</p> <p>a. Vertebrates do not have backbones. b. All vertebrates have hair. c. Vertebrates have protective skin, inside skeletons, and lungs.</p>	<p>What is the likelihood of selecting a black marble?</p>  <p>Likely unlikely Certain impossible</p>	<p>Members of which animal group of feeding their young milk?</p> <p>a. Birds b. mammals c. insects d. reptiles</p>
<p>What shape has all congruent sides?</p> <p>Square Rectangle Triangle Trapezoid</p>	<p>. Which two animal classification groups would be best for the students to use for classifying animal groups?</p> <p>Snakes lizards Iguana turtles</p>	<p>Which shape has only one set of parallel sides?</p> <p>Square Rectangle Triangle Trapezoid</p>	<p>What adaptation does the duck have that allows him to live in a water environment?</p> 	<p>If a square is a rectangle, why can't a rectangle be a square?</p>

December Fourth Grade Math-Science Calendar

--	--	--	--	--